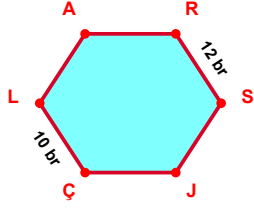
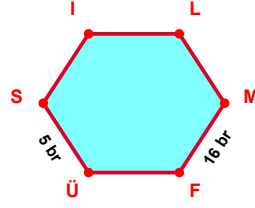


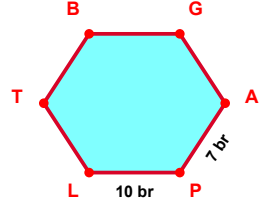
SORU: Aşağıdaki şekillerde verilen, kenar uzunlukları farklarını bulunuz.



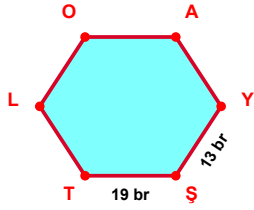
$$|RS| - |ÇL| = \dots\dots\dots$$



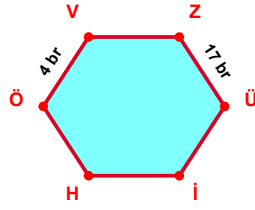
$$|MF| - |ÜS| = \dots\dots\dots$$



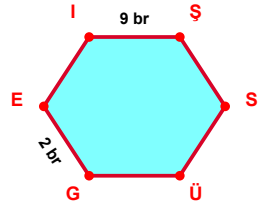
$$|PL| - |AP| = \dots\dots\dots$$



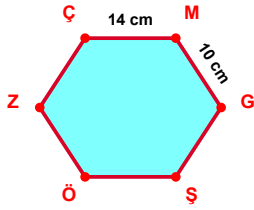
$$|ŞT| - |YŞ| = \dots\dots\dots$$



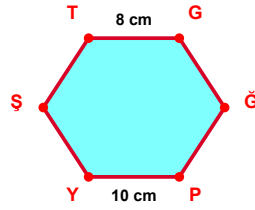
$$|ZÜ| - |ÖV| = \dots\dots\dots$$



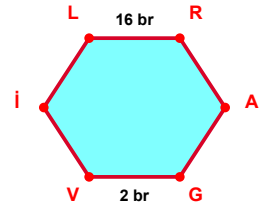
$$|İŞ| - |GE| = \dots\dots\dots$$



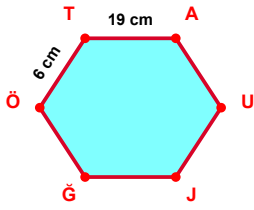
$$|ÇM| - |MG| = \dots\dots\dots$$



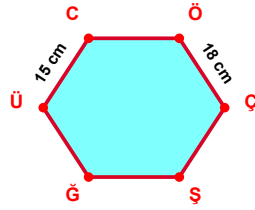
$$|PY| - |TG| = \dots\dots\dots$$



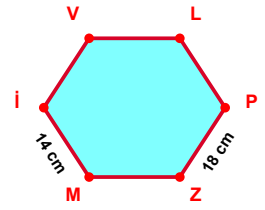
$$|LR| - |GV| = \dots\dots\dots$$



$$|TA| - |ÖT| = \dots\dots\dots$$

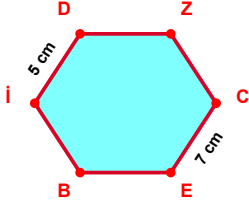


$$|ÖÇ| - |ÜC| = \dots\dots\dots$$

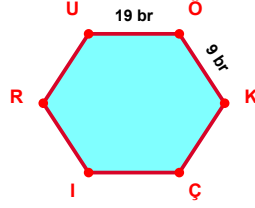


$$|PZ| - |Mİ| = \dots\dots\dots$$

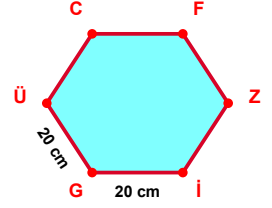
SORU: Aşağıdaki şekillerde verilen, kenar uzunlukları farklarını bulunuz.



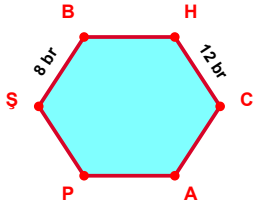
$$|CE| - |Dİ| = \dots\dots\dots$$



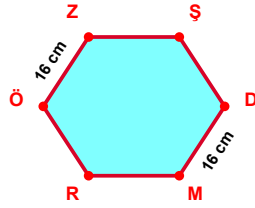
$$|UÖ| - |ÖK| = \dots\dots\dots$$



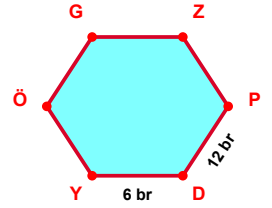
$$|Gİ| - |ÜG| = \dots\dots\dots$$



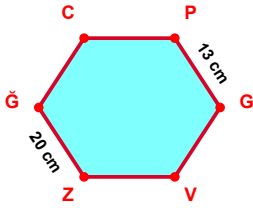
$$|HC| - |ŞB| = \dots\dots\dots$$



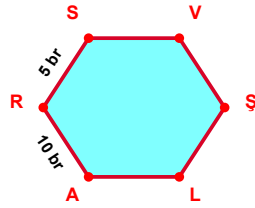
$$|DM| - |ÖZ| = \dots\dots\dots$$



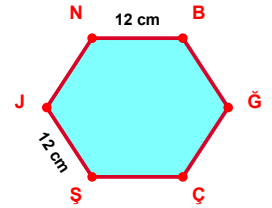
$$|PD| - |DY| = \dots\dots\dots$$



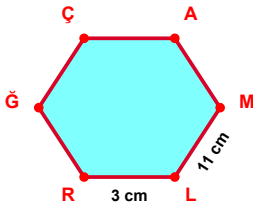
$$|ZĞ| - |PG| = \dots\dots\dots$$



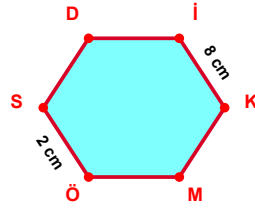
$$|AR| - |RS| = \dots\dots\dots$$



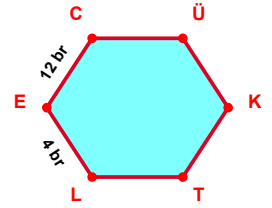
$$|NB| - |ŞJ| = \dots\dots\dots$$



$$|ML| - |LR| = \dots\dots\dots$$



$$|İK| - |ÖS| = \dots\dots\dots$$



$$|EC| - |LE| = \dots\dots\dots$$

## SÜREÇ ODAKLI DEĞERLENDİRME ÖLÇEĞİ

Doğru Sayısı: ..... / 24

Öğretmen ilgili kutucuğu işaretler.

Geliştirilmeli (0-8)

İyi (9-14)

Çok İyi (15-20)

Mükemmel (21-24)

☐
☐
☐
☐

Hazırlayan: .....

Bu bölüme sınıfınızın ilgili kazanıma yönelik genel durumuna ilişkin gözlem ve izlenimlerinizi, öğrencilerinizin bu kazanımla ilgili öğrenme eksikliklerini ve bu eksikliklerin giderilmesi amacıyla yaptığınız/yapmayı planladığınız faaliyetleri not edebilirsiniz.

| No | Adı - Soyadı | Toplam Puan | Değerlendirme |
|----|--------------|-------------|---------------|
| 1  |              |             |               |
| 2  |              |             |               |
| 3  |              |             |               |
| 4  |              |             |               |
| 5  |              |             |               |
| 6  |              |             |               |
| 7  |              |             |               |
| 8  |              |             |               |
| 9  |              |             |               |
| 10 |              |             |               |
| 11 |              |             |               |
| 12 |              |             |               |
| 13 |              |             |               |
| 14 |              |             |               |
| 15 |              |             |               |
| 16 |              |             |               |
| 17 |              |             |               |
| 18 |              |             |               |
| 19 |              |             |               |
| 20 |              |             |               |
| 21 |              |             |               |
| 22 |              |             |               |
| 23 |              |             |               |
| 24 |              |             |               |
| 25 |              |             |               |
| 26 |              |             |               |
| 27 |              |             |               |
| 28 |              |             |               |
| 29 |              |             |               |
| 30 |              |             |               |
| 31 |              |             |               |
| 32 |              |             |               |
| 33 |              |             |               |
| 34 |              |             |               |
| 35 |              |             |               |

Hazırlayan: .....